


DEELTAFELS DOOR ELKAAR

Visuele en abstracte oefeningen




Gevisualiseerde oefeningen

1. Maak groepen en los op.



5 kan keer in **20**

$$\text{.....} : 5 = \text{.....}$$




3 kan keer in **18**

$$\text{.....} : 3 = \text{.....}$$




7 kan keer in **56**

$$\text{.....} : 7 = \text{.....}$$




2 kan keer in **16**

$$\text{.....} : 2 = \text{.....}$$



4 kan keer in **28**

$$\text{.....} : 4 = \text{.....}$$



6 kan keer in **18**

$$\text{.....} : 6 = \text{.....}$$






8 kan keer in **72**

$$\text{.....} : 8 = \text{.....}$$




9 kan keer in **9**

$$\text{.....} : 9 = \text{.....}$$



10 kan keer in **30**

..... : 10 =



5 kan keer in **40**

..... : 5 =



8 kan keer in **56**

..... : 8 =




6 kan keer in **36**

..... : 6 =




7 kan keer in **42**

..... : 7 =



3 kan keer in **27**

..... : 3 =




9 kan keer in **36**

..... : 9 =



4 kan keer in **28**

..... : 4 =



2 kan keer in **12**

..... : 2 =

Abstracte oefeningen

1. Zoek de uitkomsten van de deeltafels in het rooster.

G	K	R	T	O	Z	I	Z	S	D	E	S	T
A	N	Q	N	E	G	E	N	B	L	O	V	I
W	P	E	K	G	R	S	V	W	Z	T	C	H
G	E	F	B	T	B	I	I	Z	E	T	R	K
F	M	M	Z	L	H	S	J	T	V	Q	C	T
D	R	I	E	X	Z	T	F	S	E	X	X	Y
L	H	I	P	N	E	W	I	R	N	G	P	F
I	D	T	O	H	S	E	N	B	M	M	G	P
F	M	H	G	N	O	E	U	O	X	R	B	G
D	X	C	F	O	F	C	S	L	E	A	U	M
U	F	A	Z	K	R	R	X	V	X	J	D	N
W	G	B	W	O	Z	B	M	G	G	H	R	D
D	W	V	I	E	R	F	T	I	E	N	Y	E

$48 : 6$

$9 : 3$

$36 : 4$

$80 : 8$

$14 : 7$

$28 : 7$

$45 : 9$

$30 : 5$

$56 : 8$

2. Los op.

$54 : 6 = \dots\dots\dots$

$72 : 9 = \dots\dots\dots$

$45 : 5 = \dots\dots\dots$

$35 : 7 = \dots\dots\dots$

$15 : 3 = \dots\dots\dots$

$32 : 8 = \dots\dots\dots$

$12 : 2 = \dots\dots\dots$

$24 : 6 = \dots\dots\dots$

$50 : 10 = \dots\dots\dots$

$18 : 2 = \dots\dots\dots$

$48 : 6 = \dots\dots\dots$

$90 : 9 = \dots\dots\dots$

$49 : 7 = \dots\dots\dots$

$56 : 7 = \dots\dots\dots$

$5 : 1 = \dots\dots\dots$

$28 : 4 = \dots\dots\dots$

$30 : 5 = \dots\dots\dots$

$21 : 7 = \dots\dots\dots$

$40 : 8 = \dots\dots\dots$

$16 : 8 = \dots\dots\dots$

$10 : 5 = \dots\dots\dots$

$27 : 3 = \dots\dots\dots$

$18 : 3 = \dots\dots\dots$

$32 : 4 = \dots\dots\dots$

$20 : 2 = \dots\dots\dots$

$16 : 4 = \dots\dots\dots$

$30 : 6 = \dots\dots\dots$