






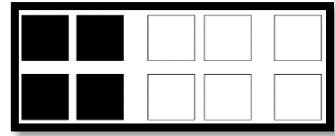
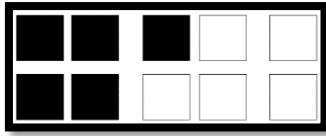
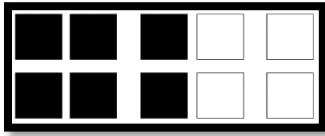
# BEWERKINGEN

Voor het eerste leerjaar


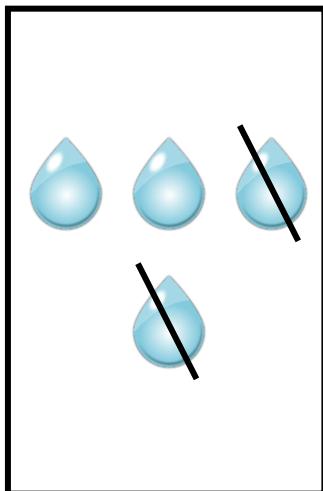

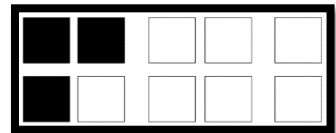
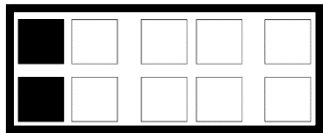
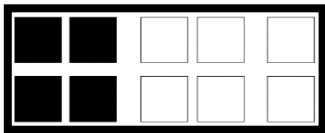


## Bijdoen of wegdoen

1. Maak evenveel. Teken bij.




2. Maak evenveel. Doorstreek.



Optellen tot 6

1. Hoeveel zijn er samen?




2

en




3

is




5




4

en




2

is

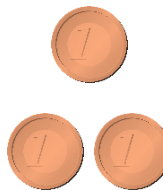


6




1

en



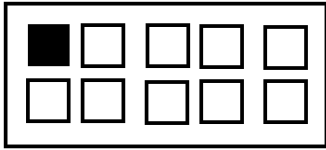
3

is



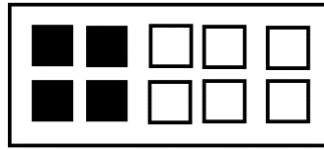
4

2. Hoeveel samen? Vul in.



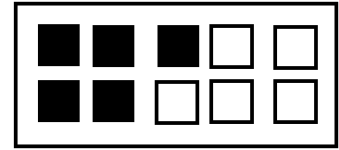
1

en

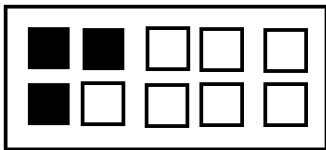


4

is

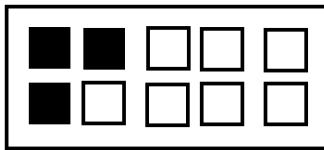


5



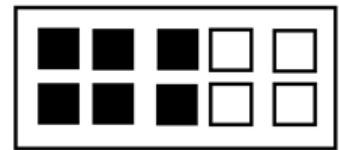
3

en

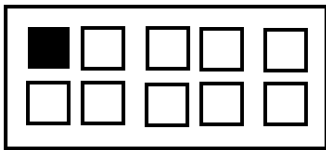


3

is

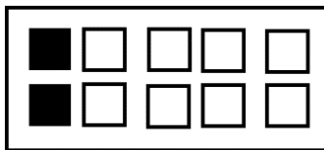


6



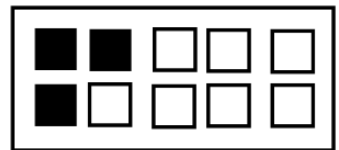
1

en

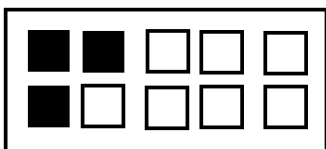


2

is

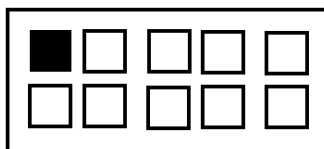


3



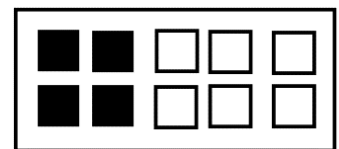
3

en

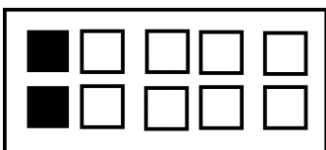


1

is

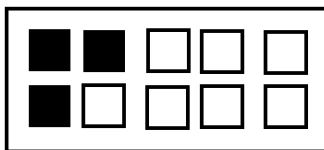


4



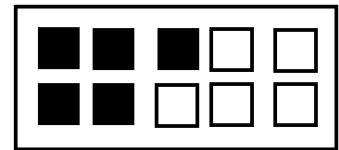
2

en



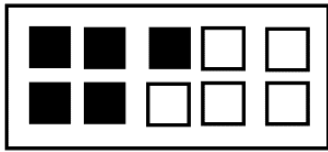
3

is

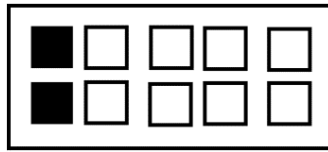


5

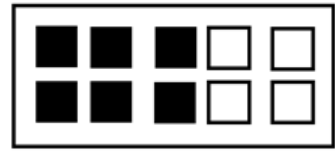
3. Teken er 1 bij. Hoeveel heb je dan samen?



5

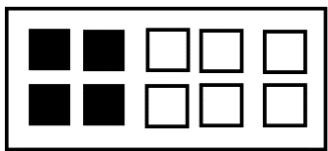


2

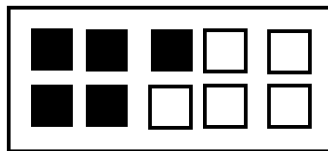


6

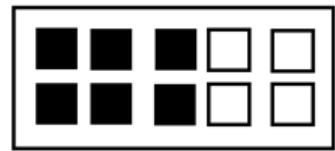
4. Teken er 2 bij. Hoeveel heb je dan samen?



4

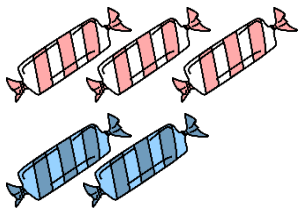


5




6

5. Schrijf en los op.




$$3 + 2 = 5$$




$$2 + 4 = 6$$




$$2 + 2 = 4$$



$$3 + 3 = 6$$



$$5 + 1 = 6$$



$$4 + 1 = 5$$

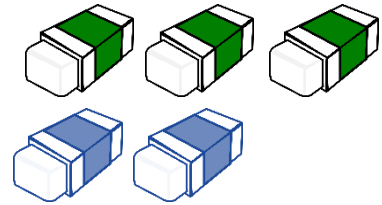
6. Schrijf en los op.




$$4 + 1 = 5$$




$$1 + 2 = 3$$




$$3 + 2 = 5$$



$$2 + 3 = 5$$



$$4 + 2 = 6$$



$$1 + 5 = 6$$

7. Los op.

$$2 + 3 = 5$$

$$1 + 4 = 5$$

$$5 + 1 = 6$$

$$6 + 0 = 6$$

$$3 + 2 = 5$$

$$4 + 1 = 5$$

$$2 + 2 = 4$$

$$5 + 0 = 5$$


$$3 + 3 = 6$$

$$4 + 2 = 6$$

$$3 + 1 = 4$$

$$0 + 1 = 1$$


8. Vul de bewerking verder aan.




$$3 + 2 = 5$$



$$4 + 2 = 6$$



$$2 + 2 = 4$$



$$1 + 5 = 6$$

9. Vul aan.

$$3 + 3 = 6$$

$$1 + 2 = 3$$

$$4 + 1 = 5$$

$$1 + 3 = 4$$

$$2 + 0 = 2$$

$$0 + 6 = 6$$


$$5 + 0 = 5$$

$$1 + 2 = 3$$

$$2 + 4 = 6$$


## Aftrekken tot 6

1. Hoeveel zijn er over?



5

min




3

is




2




6

min




2

is




4



4

min



3

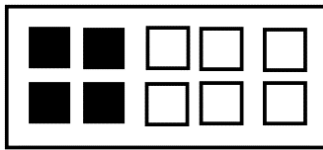
is



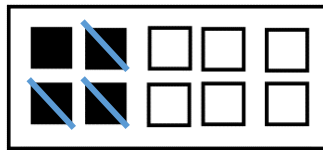
1



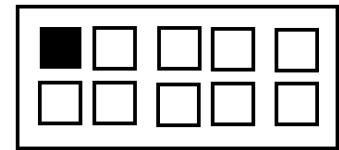
2. Hoeveel zijn er over? Vul in.



4



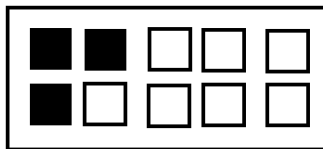
3



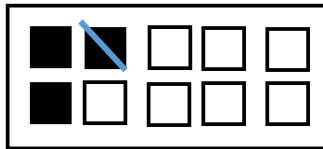
1

min

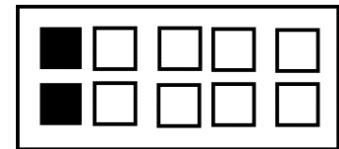
is



3



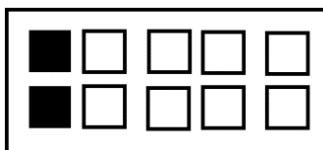
1



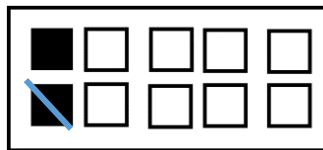
2

min

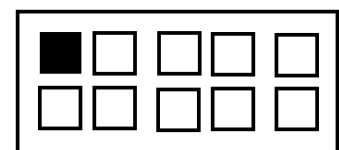
is



2



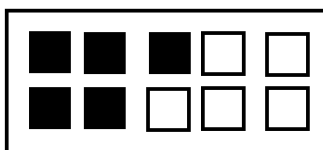
1



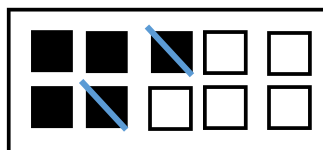
1

min

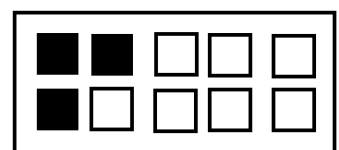
is



5



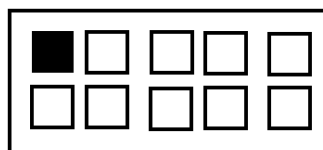
2



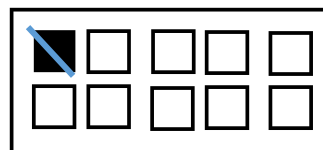
3

min

is



1



1

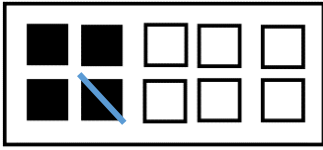


0

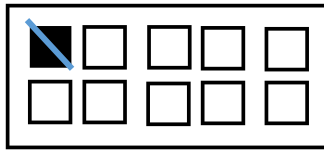
min

is

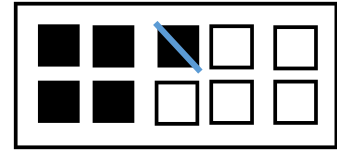
3. Schrap er 1. Hoeveel heb je nog over?



3

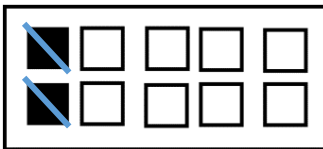


0

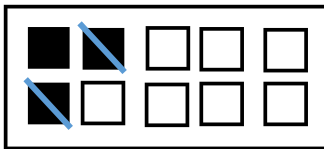


4

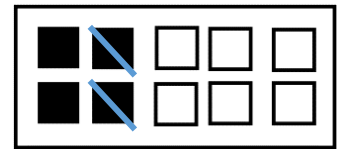
4. Schrap er 2. Hoeveel heb je nog over?



0

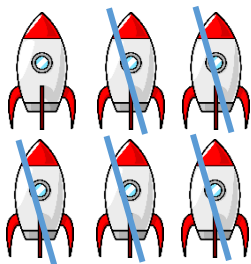


1

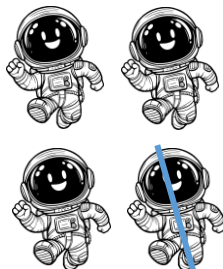


2


5. Schrijf en los op.



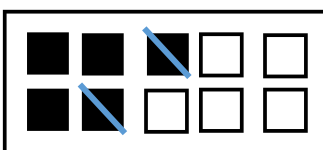
$$6 - 2 = 4$$



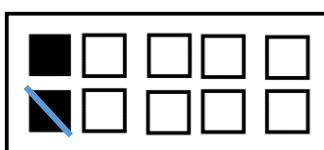
$$4 - 1 = 3$$



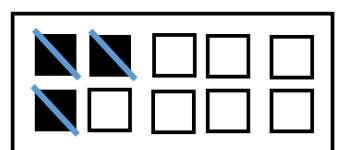
$$5 - 2 = 3$$



$$5 - 2 = 3$$




$$2 - 1 = 1$$




$$3 - 3 = 0$$


6. Schrijf en los op.



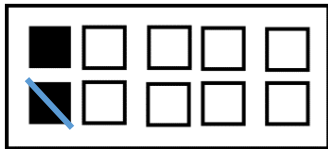
$$5 - 3 = 2$$



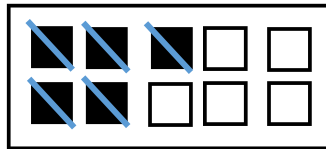
$$6 - 2 = 4$$



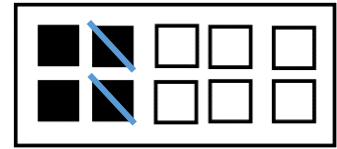
$$3 - 1 = 2$$



$$2 - 1 = 1$$



$$5 - 5 = 0$$



$$4 - 2 = 2$$

7. Los op.

$$5 - 2 = 3$$

$$6 - 3 = 3$$

$$4 - 1 = 3$$

$$3 - 2 = 1$$

$$6 - 5 = 1$$

$$2 - 1 = 1$$

$$5 - 4 = 1$$

$$4 - 3 = 1$$

$$3 - 1 = 2$$

$$6 - 6 = 0$$


$$5 - 2 = 3$$

$$4 - 2 = 2$$

8. Vul de bewerking verder aan.



$$5 - 3 = 2$$



$$6 - 2 = 4$$



$$4 - 3 = 1$$



$$4 - 1 = 3$$

9. Vul aan.

$$3 - 2 = 1$$

$$6 - 2 = 4$$

$$2 - 2 = 0$$

$$5 - 3 = 2$$

$$3 - 2 = 1$$

$$4 - 1 = 3$$


$$1 - 1 = 0$$

$$5 - 4 = 1$$

$$4 - 3 = 1$$

## Bewerkingen tot 6 automatiseren

1. Wat hoort bij elkaar? Geef dezelfde kleur.



2. Los op.

$$6 - 2 = 4$$

$$5 - 5 = 0$$

$$3 - 3 = 0$$

$$2 + 4 = 6$$

$$6 - 0 = 6$$

$$1 + 5 = 6$$

$$1 + 3 = 4$$

$$4 + 1 = 5$$

$$1 - 0 = 1$$

$$2 + 1 = 3$$

$$3 + 2 = 5$$

$$3 - 1 = 2$$

$$5 + 0 = 5$$

$$6 - 3 = 3$$

$$1 + 1 = 2$$

$$0 + 0 = 0$$

$$0 + 6 = 6$$

$$5 + 1 = 6$$

$$5 - 0 = 5$$

$$5 - 1 = 4$$

$$3 + 1 = 4$$

$$6 - 2 = 4$$

$$4 - 3 = 1$$

$$4 + 2 = 6$$

$$2 + 1 = 3$$

$$6 - 3 = 3$$

$$5 - 1 = 4$$

$$5 - 4 = 1$$

$$2 + 2 = 4$$

$$3 + 2 = 5$$

$$1 + 3 = 4$$

$$6 + 0 = 6$$

$$6 - 1 = 5$$

$$3 + 3 = 6$$

$$5 - 3 = 2$$






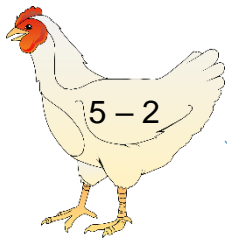
$$3 + 0 = 3$$

$$2 + 3 = 5$$

$$6 - 3 = 3$$


$$4 - 2 = 2$$

3. Verbind.



# Optellen tot 10

1. Hoeveel zijn er samen?




6

en



3

is




9




3

en



4

is



7




7

en



3

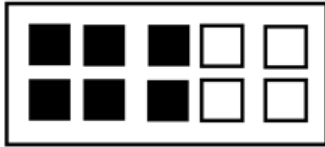
is



10

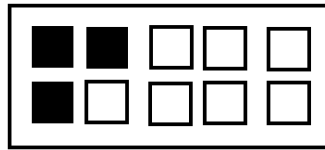


2. Hoeveel samen? Vul in.




6

en




3

is

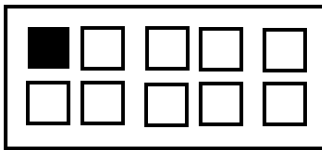


9




9

en

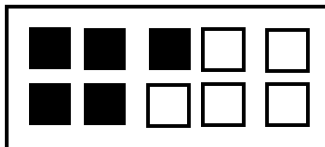


1

is

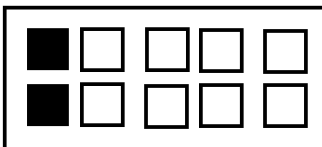


10



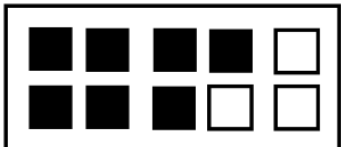
5

en

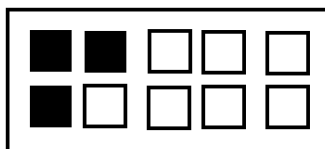


2

is

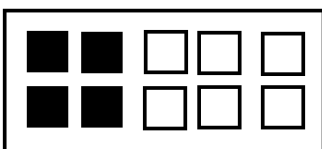


7



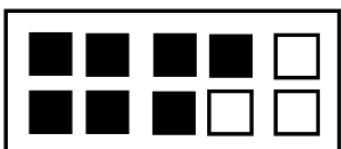
3

en

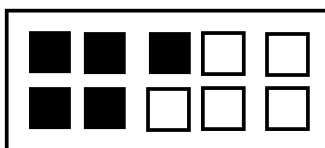


4

is

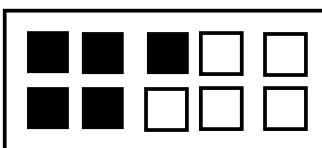


7




5

en



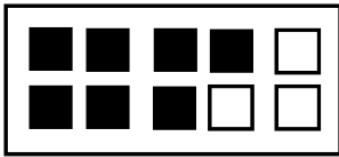
5

is




10

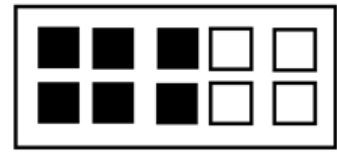
3. Teken er 1 bij. Hoeveel heb je dan samen?



7




10

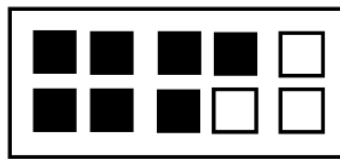


6


4. Teken er 2 bij. Hoeveel heb je dan samen?



10

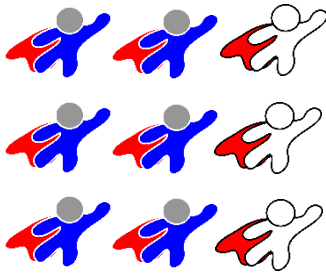


7



8

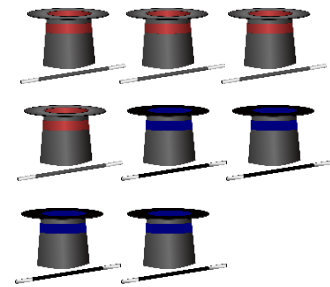
5. Schrijf en los op.




$$6 + 3 = 9$$




$$3 + 4 = 7$$




$$4 + 4 = 8$$



$$6 + 2 = 8$$




$$7 + 1 = 8$$




$$4 + 5 = 9$$

6. Schrijf en los op.




$$2 + 4 = 6$$



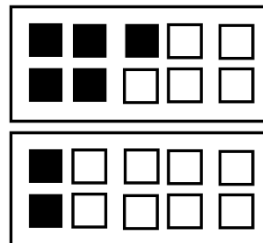
$$4 + 4 = 8$$



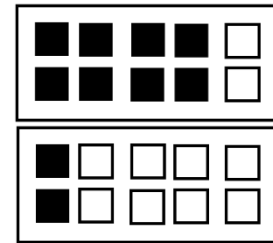
$$7 + 3 = 10$$



$$6 + 3 = 9$$



$$5 + 2 = 7$$



$$8 + 2 = 10$$

7. Los op.

$$0 + 10 = 10$$

$$3 + 6 = 9$$

$$9 + 0 = 9$$

$$1 + 8 = 9$$

$$2 + 7 = 9$$

$$6 + 3 = 9$$

$$2 + 6 = 8$$

$$1 + 9 = 10$$

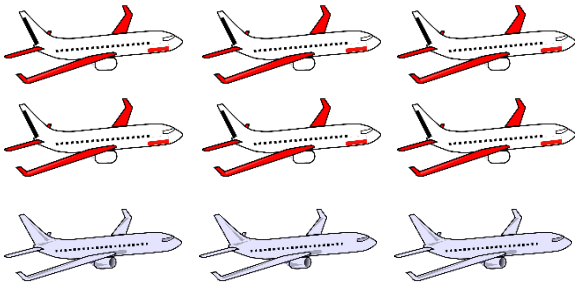
$$4 + 4 = 8$$

$$5 + 5 = 10$$

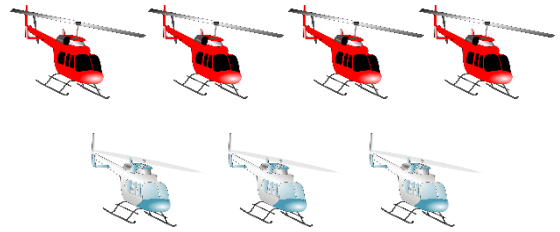
$$3 + 3 = 6$$

$$7 + 0 = 7$$


8. Vul de bewerking verder aan.



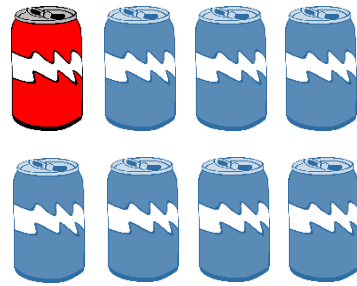
$$6 + 3 = 9$$



$$4 + 3 = 7$$



$$3 + 7 = 10$$



$$1 + 7 = 8$$

9. Vul aan.

$$4 + 4 = 8$$

$$2 + 6 = 8$$

$$2 + 7 = 9$$

$$1 + 6 = 7$$

$$3 + 6 = 9$$

$$0 + 6 = 6$$

$$5 + 5 = 10$$

$$6 + 1 = 7$$

$$7 + 3 = 10$$


# Aftrekken tot 10

1. Hoeveel zijn er over?




9

min

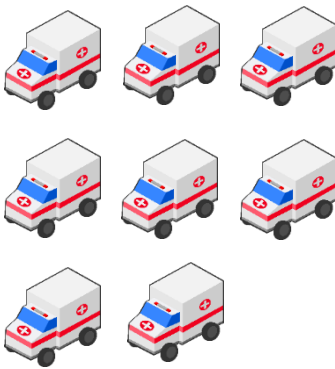


3

is

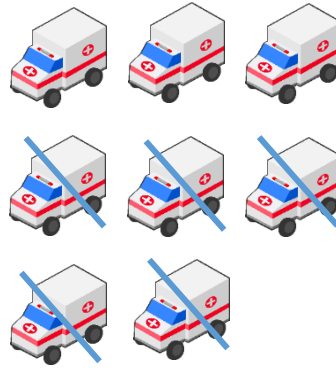


6




8

min



5

is



3



7

min




6

is



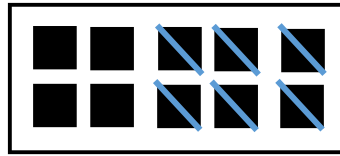
1

2. Hoeveel zijn er over? Vul in.




10

min

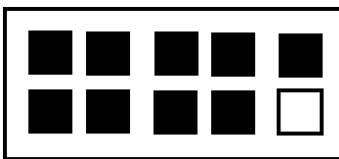


7

is

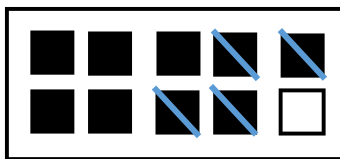


8



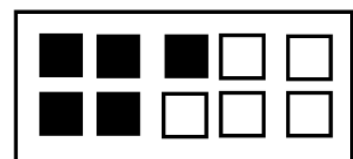
9

min

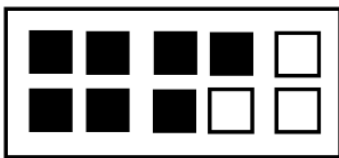


4

is

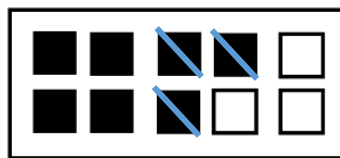


5



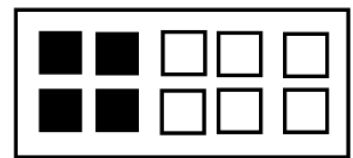
7

min




3

is




4



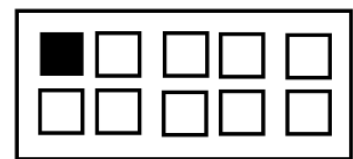
8

min

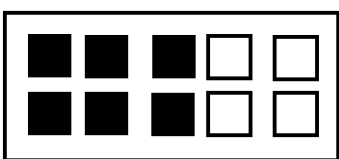


7

is

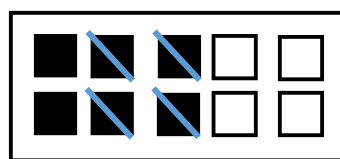


1



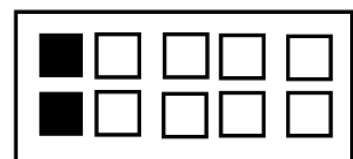
6

min




4

is



2


3. Schrap er 1. Hoeveel heb je nog over?



9

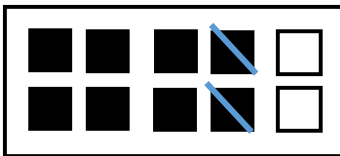


6

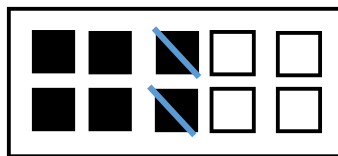


8

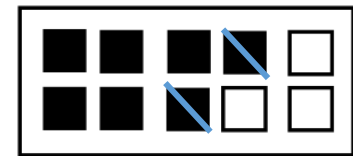
4. Schrap er 2. Hoeveel heb je nog over?



6

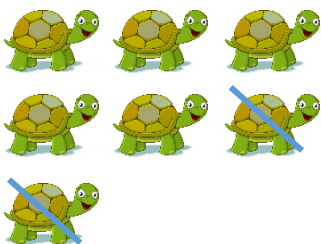


4




5


5. Schrijf en los op.



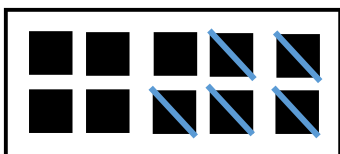
$$7 - 2 = 5$$



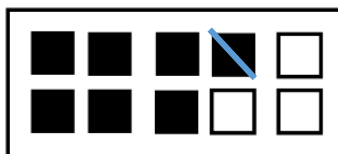
$$9 - 5 = 4$$



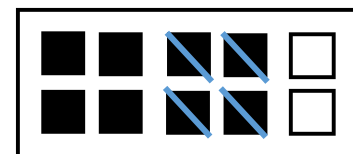
$$8 - 5 = 3$$



$$10 - 5 = 5$$



$$7 - 1 = 6$$



$$8 - 4 = 4$$

6. Schrijf en los op.




$$7 - 4 = 3$$



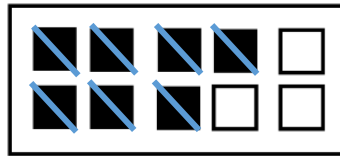
$$10 - 8 = 2$$



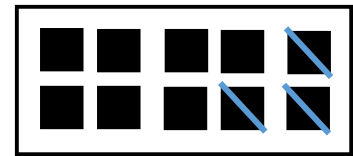
$$8 - 2 = 6$$



$$9 - 1 = 8$$



$$7 - 7 = 0$$



$$10 - 3 = 7$$

7. Los op.

$$10 - 1 = 9$$

$$8 - 3 = 5$$

$$10 - 4 = 6$$

$$9 - 6 = 3$$

$$8 - 7 = 1$$

$$9 - 7 = 2$$

$$10 - 10 = 0$$

$$9 - 8 = 1$$

$$8 - 6 = 2$$


$$6 - 6 = 0$$

$$5 - 2 = 3$$

$$4 - 2 = 2$$




8. Vul de bewerking verder aan.



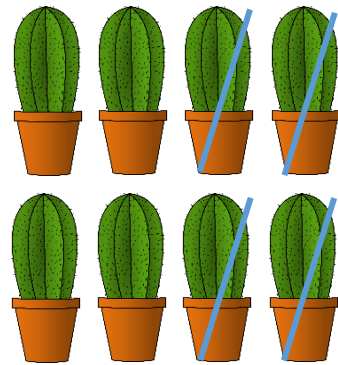
$$7 - 5 = 2$$



$$9 - 4 = 5$$



$$10 - 7 = 3$$



$$8 - 4 = 4$$

9. Vul aan.

$$9 - 6 = 3$$

$$10 - 6 = 4$$

$$10 - 8 = 2$$

$$7 - 5 = 2$$

$$9 - 8 = 1$$

$$8 - 5 = 3$$

$$8 - 8 = 0$$

$$8 - 4 = 4$$

$$7 - 3 = 4$$

## Bewerkingen tot 10 automatiseren

1. Wat hoort bij elkaar? Geef dezelfde kleur.



2. Los op.

$$5 - 4 = 1$$

$$10 - 2 = 8$$

$$9 - 4 = 5$$

$$0 + 3 = 3$$

$$8 - 2 = 6$$

$$5 + 5 = 10$$

$$6 + 2 = 8$$

$$4 + 6 = 10$$

$$8 - 0 = 8$$

$$6 + 1 = 7$$

$$3 + 2 = 5$$

$$9 - 7 = 2$$

$$4 + 4 = 8$$

$$4 - 4 = 0$$

$$4 + 3 = 7$$

$$5 + 4 = 9$$

$$0 + 9 = 9$$

$$5 + 3 = 8$$

$$9 - 1 = 8$$

$$7 - 7 = 0$$

$$6 + 4 = 10$$

$$7 - 5 = 2$$

$$8 - 7 = 1$$

$$4 + 2 = 6$$

$$2 + 5 = 7$$

$$7 - 3 = 4$$

$$3 + 6 = 9$$

$$7 - 4 = 3$$

$$5 + 5 = 10$$

$$9 + 0 = 9$$

$$8 + 0 = 8$$

$$2 + 4 = 6$$

$$6 - 5 = 1$$

$$1 + 3 = 4$$

$$9 - 3 = 6$$

$$8 + 1 = 9$$

$$6 + 3 = 9$$

$$6 - 3 = 3$$

$$8 - 5 = 3$$